




P1 Math  
Unit 1 Test




1. Count and write the numbers.

a. 

b. 

c. 

d. 

2. Match to another way to add the numbers.

$6 + 4 = 10$

$7 + 3 = 10$

$8 + 2 = 10$

$4 + 6 = 10$

$3 + 7 = 10$

$2 + 8 = 10$

3. Look at the 20 square to answer the questions.


1	2	3	4	5	6	7	8	9	10
11	12	13	14	15	16	17	18	19	20

- 10 and 1 makes \_\_\_\_\_.
- 10 and 5 makes \_\_\_\_\_.
- 10 and \_\_\_\_\_ makes 14.
- 10 and \_\_\_\_\_ makes 18.
- \_\_\_\_\_ and 7 makes 17.

4. How many are there in each group?



$10 + \underline{\quad} = \underline{\quad}.$



$10 + \underline{\quad} = \underline{\quad}.$

5. Which one is **shorter**?

A.



B.



6. Which one is **longer**?

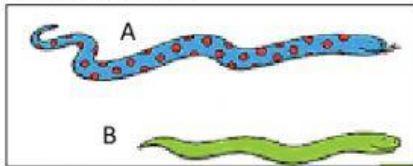
A.



B.



7. Look at the picture.



Snake A is \_\_\_\_\_ than snake B.

Snake B is \_\_\_\_\_ than snake A.