 ICM INSAN CENDEKIA MADANI	Assessment Unit 1 and Unit 2	Name :	
		Class :	
		Teacher :	
		Date :	
✓ Individual guided practice ✓ Independent/ fluency practice		Marks: 25	Score:


Read the instruction below and answer all questions!



Worksheet 1

Counting in Hundreds, Tens and Ones

- 1 Count and write the numbers in the boxes.

(a) 

hundreds
 tens
 ones

- 2 Complete the sentences.

- (a) The digit 0 in 306 is in the _____ place.
 Its value is _____.
- (b) The digit 5 in 985 is in the _____ place.
 Its value is _____.

Worksheet 3

Numbers and Words

1 Match.

- (a) 27 • • one hundred and one
- (b) 319 • • three hundred and nineteen
- (c) 101 • • twenty-seven

Worksheet 2

Place Values

1 Write the numbers in the boxes.

(a) 9 tens 7 ones

(b) 3 hundreds 5 tens 6 ones

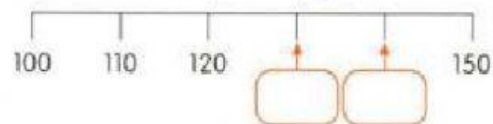
2

More About Numbers

Worksheet 1

Counting On and Counting Back

1

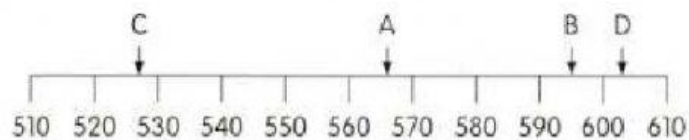


- Write the missing numbers in the boxes.
- Complete the sentences.
 - 10 more than 120 is _____.
 - 10 less than 150 is _____.

Worksheet 2

Number Line

- 1 Write the correct letter in each box beside the number.



527 603 595 566

Worksheet 3

Comparing and Ordering

- 1 Draw a ring around the smaller number.

(a)



- 2 Draw a ring around the larger number.

(a)



Worksheet 4

Rounding Numbers

- 1 Match each number to its value rounded to the nearest ten.

(a)  • • 

(b)  • • 

(c)  • • 