
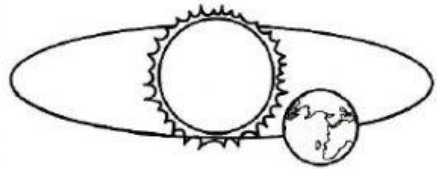


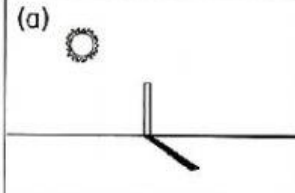
### 9.2 Rotation and Revolution of the Earth

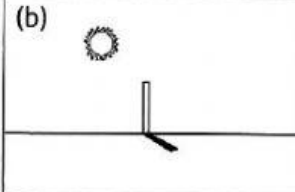
3 Complete the table with the correct information.

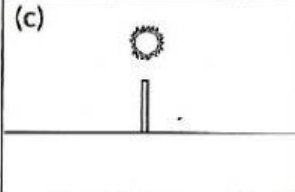
Rotation of the Earth 	Movement of the Earth	Revolution of the Earth 
(a) _____	Way of movement	(b) _____
(c) _____	Period	(d) _____

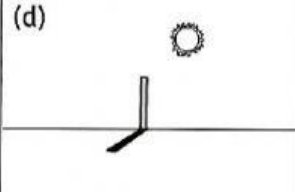
(4 marks)

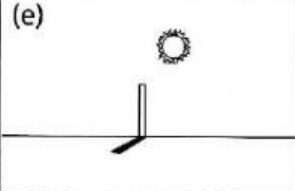
4 Match the diagrams with the suitable statements.

(a) 

(b) 

(c) 

(d) 

(e) 

- Time: 12.00 noon  
Direction of shadow: None
- Time: 8.00 a.m.  
Direction of shadow: West
- Time: 6.00 p.m.  
Direction of shadow: East
- Time: 3.00 p.m.  
Direction of shadow: East
- Time: 11.00 a.m.  
Direction of shadow: West

(5 marks)