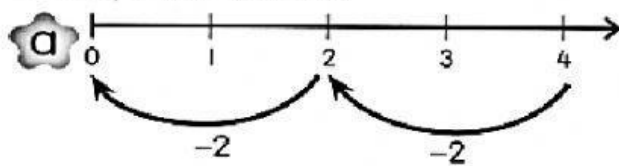
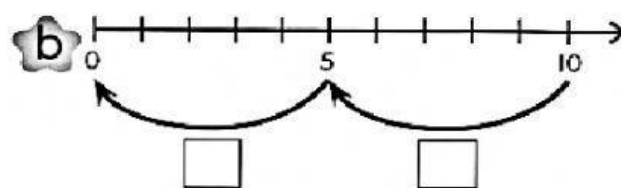


Activity 2

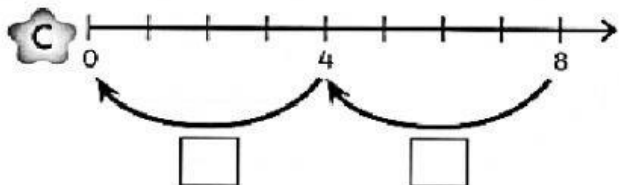
1 Complete these.



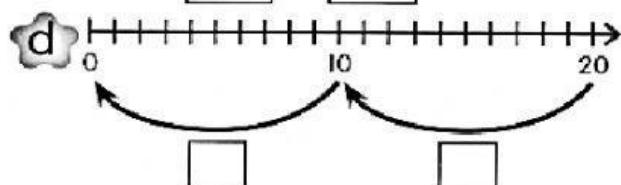
$$4 - 2 - \boxed{2} = 0$$



$$10 - \boxed{} - \boxed{} = 0$$



$$\boxed{} - \boxed{} - \boxed{} = 0$$



$$\boxed{} - \boxed{} - \boxed{} = 0$$

2 Complete the number sentences.

- a Ain has 8 packets of lychee drink. She gives 4 packets to Chai. The balance of 4 packets are given to Raj.

$$8 - \boxed{} - \boxed{} = 0$$

- b There are 15 cakes on a tray. 5 cakes are put on a plate. 5 cakes are given to a neighbour and the balance are put into a box.

$$15 - \boxed{} - \boxed{} - \boxed{} = 0$$

- c There are 40 chairs. 10 chairs are sold on Monday. 10 chairs are sold on Tuesday. On Wednesday, 10 chairs are sold. The balance are sold on Thursday.

$$\boxed{} - \boxed{} - \boxed{} - \boxed{} - \boxed{} = 0$$