

Oral Math Worksheet

Name: _____

Level: II

I. Choose the correct operation:

1. Lucy went to the grocery store. She bought 12 packs of cookies and 16 packs of noodles. How many packs of groceries did she buy in all?

2. Cade had 87 marbles. He gave 17 marbles to Dylan. How many marbles are left with Cade now?

3. Roshan read 15 pages of story book yesterday. Today he read 21 pages. What is the total number of pages read by him on both the days?

4. Rayan went to a pet shop. He bought 7 gold fish and 9 angel fish. How many fish did he buy altogether?

5. Riya had 30 chocolates. She gave 10 chocolates to her brother. How many chocolates are left with her?

6. Deepthi had ₹ 500 in her piggy bank. She used ₹ 100 to buy a pencil box. How much rupees are left with her now?


Count the sides on each shape and press the correct answer below.




5 3 4




3 2 1




1 4 3




2 1 6



1 5 3



3 2 6



1 4 8



3 4 1



2 3 8

Q.3 Complete the patterns:-

5, __, 7, 8, __, __, 11, 12, __

9, __, 11, 12, 13, __, __, 16, __

13, 14, __, __, 17, __, __, __

8, 9, __, 11, __, __, 14, 15, __

14, __, __, __, __, __, 20

* 20, __, 18, 17, __, __, 14, __