










Name _____ Date _____

Skill 2 - 9D: Time

Read a Clock: Five Minutes

Directions: Write the time two ways on the lines below.

<p>10.</p>  <p>_____</p> <p>_____ minutes after _____</p>	<p>11.</p>  <p>_____</p> <p>_____ minutes after _____</p>	<p>12.</p>  <p>_____</p> <p>_____ minutes after _____</p>
<p>13.</p>  <p>_____</p> <p>_____ minutes after _____</p>	<p>14.</p>  <p>_____</p> <p>_____ minutes after _____</p>	<p>15.</p>  <p>_____</p> <p>_____ minutes after _____</p>
<p>16.</p>  <p>_____</p> <p>_____ minutes after _____</p>	<p>17.</p>  <p>_____</p> <p>_____ minutes after _____</p>	<p>18.</p>  <p>_____</p> <p>_____ minutes after _____</p>