




TALLY MARKS

1 Complete the chart with the correct information

Object	Number	Tally marks
		
		
		

Look at the chart that you do in point 1 and complete with true or false

There are 9 suns

TRUE

FALSE

There are 2 hearts

TRUE



FALSE

There are 2 clouds

TRUE

FALSE

Look to the chart. There are Tally Marks?

	Not allowed	2
	Security Pass	5