

NAME: _____

DATE: _____

TWO DIMENSIONAL (FLAT) SHAPES

Hey LEADers! It's time to watch this video:

<https://www.youtube.com/watch?v=VAWaV1upv6E>

After you have watched the video, try to answer the following questions!

Drag the correct word into each blank.

A circle is like a big _____ .

All triangles have _____ sides.

An oval is like a stretched out _____ .

A square has _____ sides that are all the _____ length.

A _____ has four sides like a stretched out _____ .

A trapezoid has two parallel _____ and four _____ .


Parallel lines are the same _____ apart at every point. They never move closer or _____ away.

The opposite sides of the parallelogram are always _____ .











A _____ has five sides.

A hexagon has _____ sides.

An _____ has eight sides.



Label each shape. Drag the correct word into each blank.

				
_____	_____	_____	_____	_____
				
_____	_____	_____	_____	_____

circle	trapezoid	pentagon	triangle	octagon
square	hexagon	oval	rectangle	parallelogram