

TELLING THE TIME - QUARTER TO SHEET 1

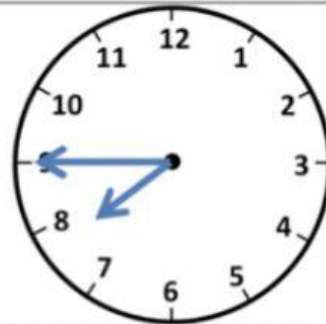
Write the correct time underneath each clock. The first one has been done for you.



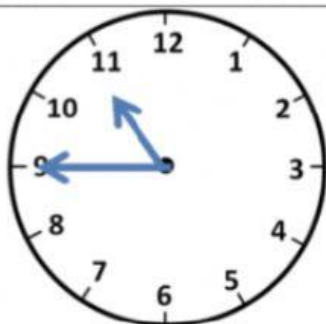
Quarter to 4



Quarter to ____



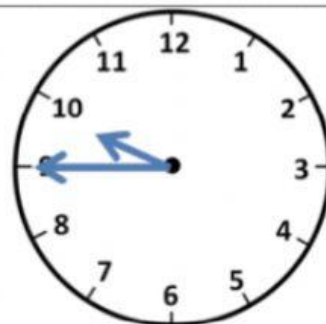
Quarter to ____



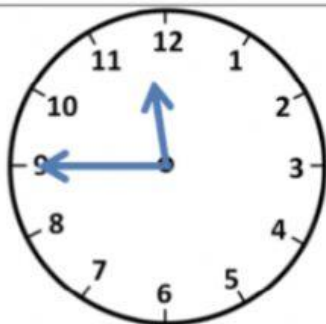
Quarter to ____



Quarter to ____



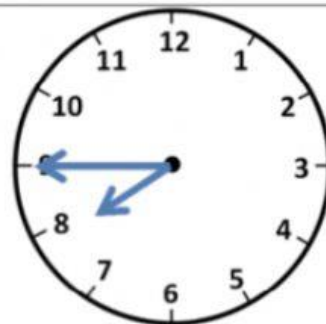
Quarter to ____



Quarter to ____



Quarter to ____



Quarter to ____

