




4TH GRADE – MATHS



DECIMALS

INTERACTIVE WORKSHEET 01

I. Write the decimal forms for the shaded portions in the figures below.



II. Write the decimal forms for the un shaded portions in the figures below.



III. Look at the following fractions. They have their denominator as 1000. Write them in decimal form.

a. $\frac{9}{1000} =$

b. $\frac{101}{1000} =$

c. $\frac{21}{1000} =$

d. $\frac{225}{1000} =$

e. $\frac{196}{1000} =$

f. $\frac{63}{1000} =$

g. $\frac{300}{1000} =$

h. $\frac{506}{1000} =$

i. $\frac{874}{1000} =$

j. $\frac{201}{1000} =$

k. $\frac{7}{1000} =$

l. $\frac{999}{1000} =$



AIMS-INDIA

