

CLASS – II
SUBJECT – MATHS
CHAPTER -5 (PATTERNS)
WORKSHEET

NAME:

ROLL NO. -

1. Let us look at pattern with numbers. Fill the number in the the blank space of pattern.

3,6,9,12,.....

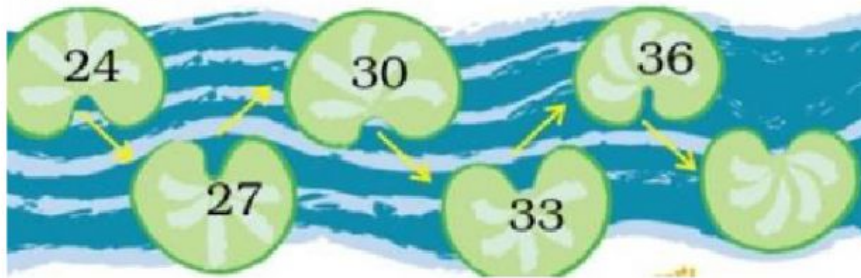
15

14

18

13

2. Look at pattern with numbers. Fill the number in the blank space of pattern.




37

38

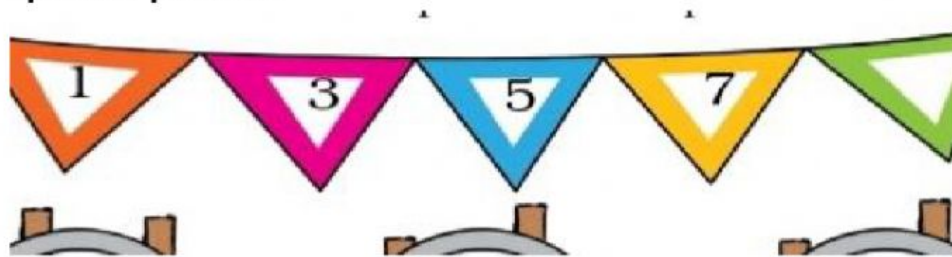
39

40

3. Look at the pattern and fill up the boxes .



4. Look at pattern with numbers. Fill the number in the blank space of pattern.



8

21

9

10

5. Look at the pattern and fill up the boxes .

