
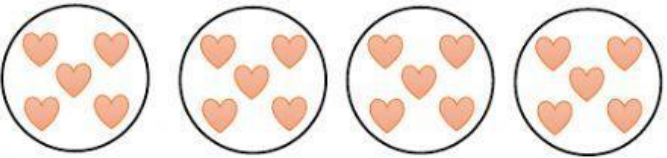
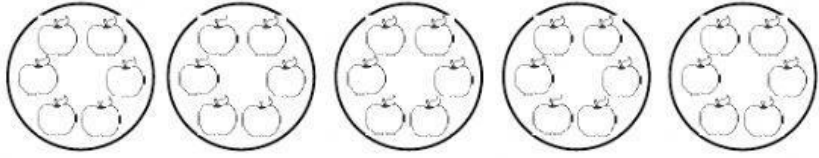


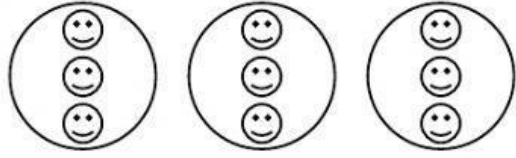
Write the addition and multiplication sentence for the following picture..

1.  **1. ____ x ____ =**
____ + ____ + ____ = ____

2.  **2. ____ x ____ =**
____ + ____ + ____ + ____ = ____

3.  **3. ____ x ____ =**
____ + ____ = ____ **4. ____ x ____ =**

4.  **____ + ____ + ____ + ____ + ____ = ____**

5.  **5. ____ x ____ =**
____ + ____ + ____ = ____