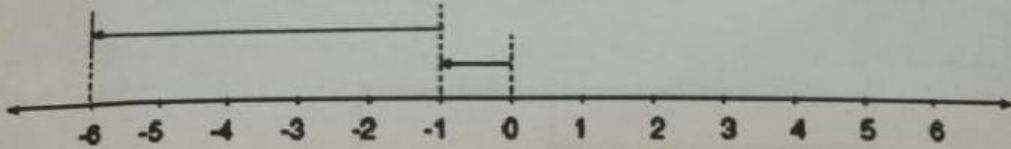


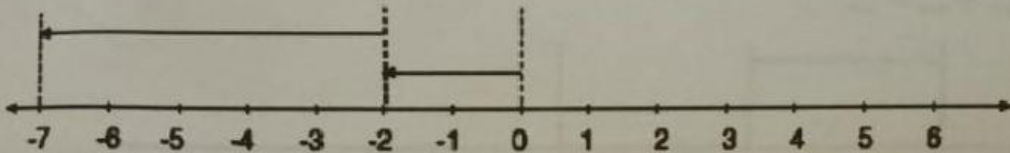
## E-LKPD MATEMATIKA OPERASI HITUNG BILANGAN BULAT

Isilah titik-titik di bawah ini dengan melihat gambar garis bilangan!

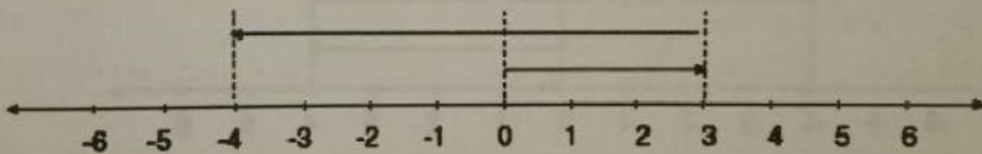
a. .... + ..... = .....



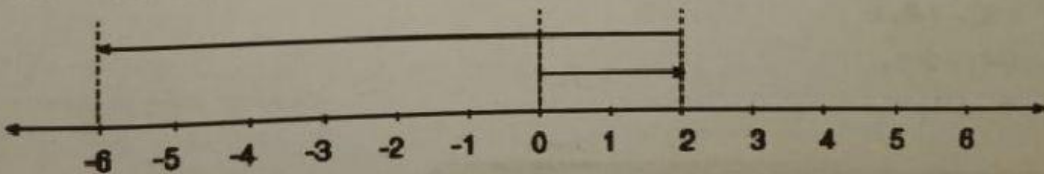
b. .... + ..... = .....



c. .... + ..... = .....



d. .... + ..... = .....



Hitunglah penjumlahan berikut ini!

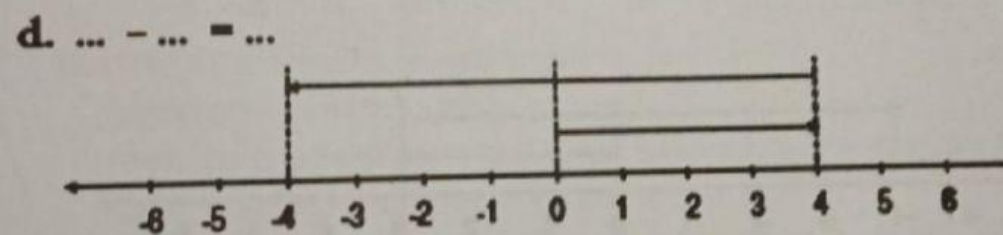
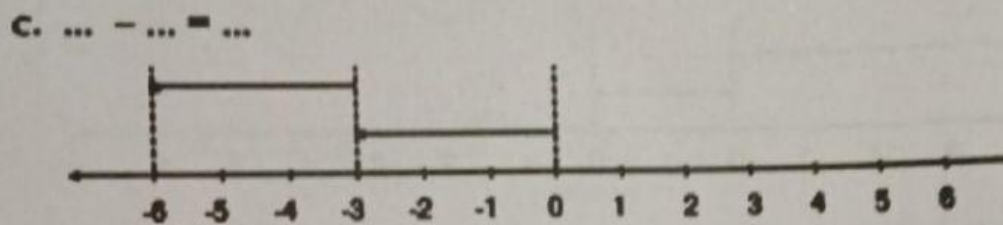
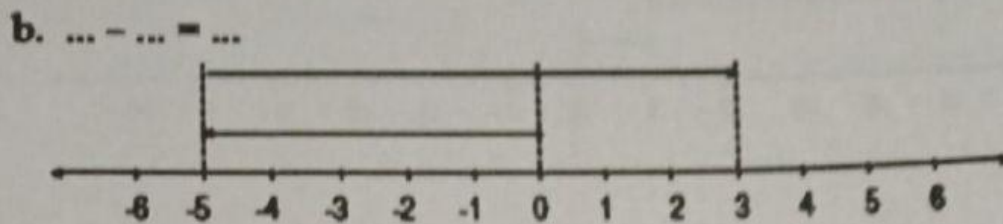
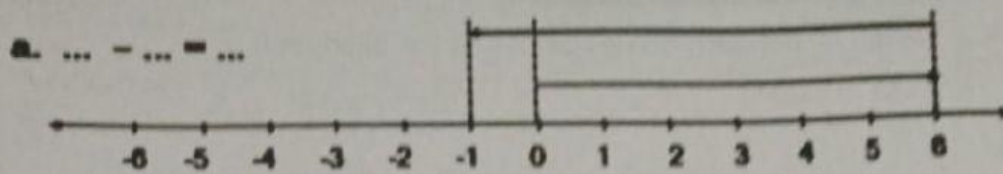
a.  $-3 + (-5) = \dots$

b.  $2 + (-3) = \dots$

c.  $(-4) + 3 = \dots$

d.  $-6 + (-2) = \dots$

Isilah titik-titik di bawah ini dengan melihat gambar garis bilangan!



Hitunglah pengurangan berikut ini!

a.  $(-3) - (-2) = \dots$

b.  $(-5) - (-6) = \dots$

c.  $(-4) - 2 = \dots$

d.  $5 - (-1) = \dots$