



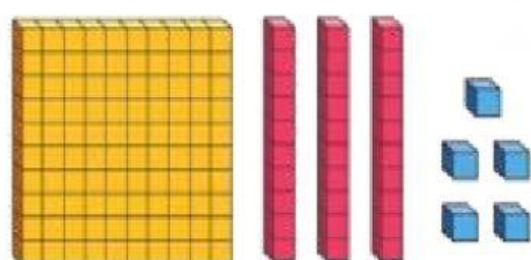
ESCOLA MUNICIPAL DE ENSINO FUNDAMENTAL JOSÉ SOUTO

ALUNO(A): _____

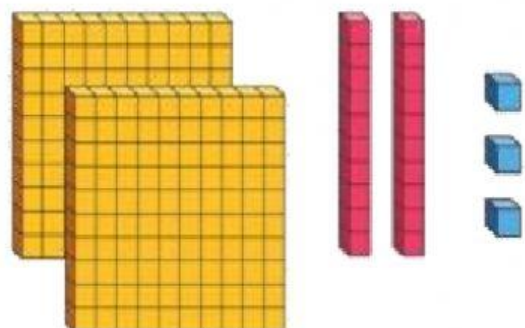
PROFESSORA: FABIANA

ATIVIDADE 25- SISTEMA DE NUMERAÇÃO DECIMAL

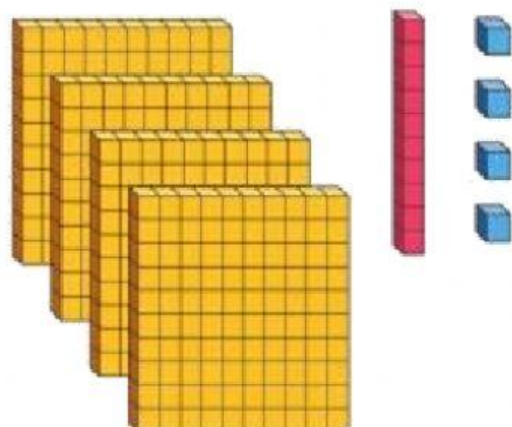
1- REGISTRE A QUANTIDADE INDICADA EM CADA SITUAÇÃO:



Centenas	Dezenas	Unidades



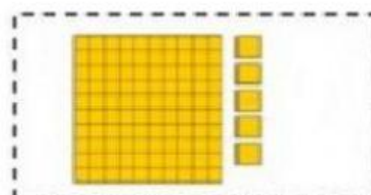
Centenas	Dezenas	Unidades



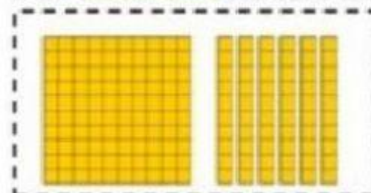
Centenas	Dezenas	Unidades

2- ARRASTE O MATERIAL DOURADO AO VALOR CORRESPONDENTE:

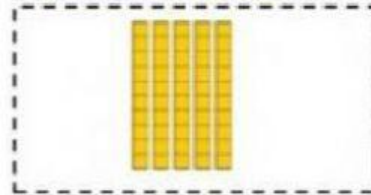

152 ➡



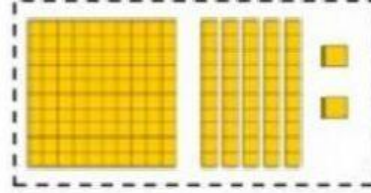
160 ➡



40 ➡



105 ➡



3- ESCREVA O VALOR INDICADO EM CADA SITUAÇÃO:

