



Omareyah International Schools

Math Department

Second Semester 2020/2021

Math worksheet

Name: _____

Grade 3: _____

Q1: Fill in the the value of the underlined digit:

(/2)

a) 6821

b) 9507

Q3: Arrange the following numbers from the largest to the smallest:

(/2)

6290

6902

6295

7834

6945

> > > >

Q6: Circle the correct answer for the following questions after watching the lesson video

1) 4584 Rounded to the nearest 100 is

a) 4500

b) 4600

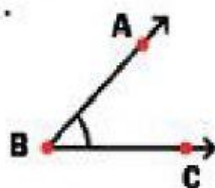
2) Right angles are _____ degrees

a) 50

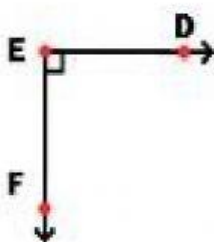
b) 90

Question seven: Name the following angles

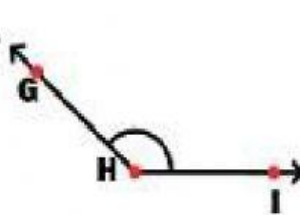
1.



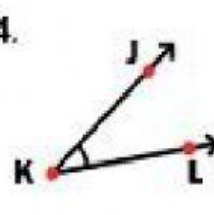
2.




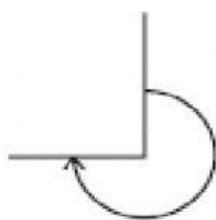
3.



4.



Question eight: Remember the types of angles and their measures



Quarter turn

Half turn

Complete turn

Three quarters
turn