

Name _____ No. _____ class _____

Part 2: choose the name of each shape in the blanks. (5 Point)

Pentagonal Pyramid

Triangular Prism

Triangular Pyramid

Hexagonal Prism

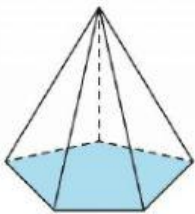
Cuboid

Icosahedron

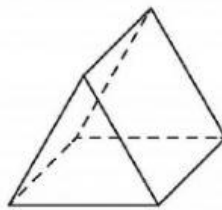
Dodecahedron

Cube

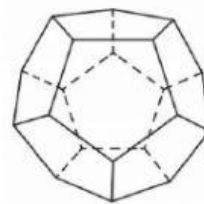
Cone



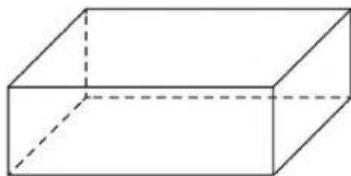
1.



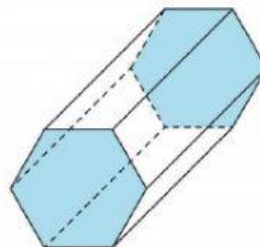
2.



3.



4.



5.