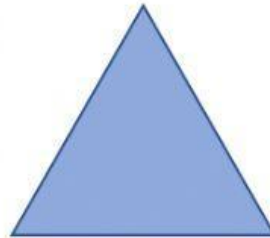


# 2D SHAPES


Write the name of each shape below.




---



---




---




---




---



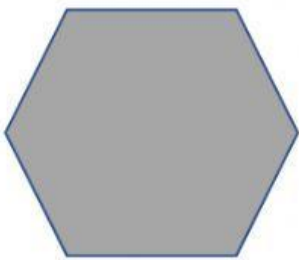
---



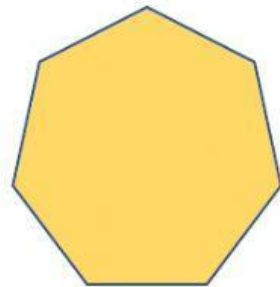
---



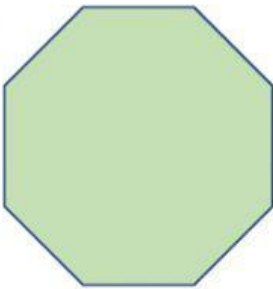
---



---




---



---

# 3D SHAPES

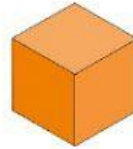


Name of Shape: \_\_\_\_\_

Faces: \_\_\_\_\_

Vertices: \_\_\_\_\_

Edges: \_\_\_\_\_

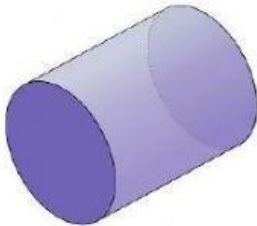


Name of Shape: \_\_\_\_\_

Faces: \_\_\_\_\_

Vertices: \_\_\_\_\_

Edges: \_\_\_\_\_

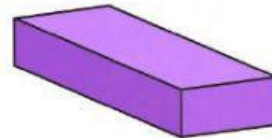


Name of Shape: \_\_\_\_\_

Faces: \_\_\_\_\_

Vertices: \_\_\_\_\_

Edges: \_\_\_\_\_




Name of Shape: \_\_\_\_\_

Faces: \_\_\_\_\_

Vertices: \_\_\_\_\_

Edges: \_\_\_\_\_



Name of Shape: \_\_\_\_\_

Faces: \_\_\_\_\_

Vertices: \_\_\_\_\_

Edges: \_\_\_\_\_

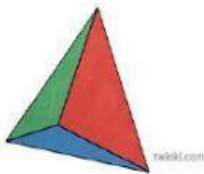


Name of Shape: \_\_\_\_\_

Faces: \_\_\_\_\_

Vertices: \_\_\_\_\_

Edges: \_\_\_\_\_

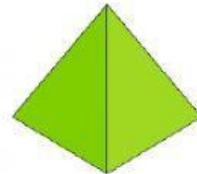


Name of Shape: \_\_\_\_\_

Faces: \_\_\_\_\_

Vertices: \_\_\_\_\_

Edges: \_\_\_\_\_



Name of Shape: \_\_\_\_\_

Faces: \_\_\_\_\_

Vertices: \_\_\_\_\_

Edges: \_\_\_\_\_