

ESCOLA: _____
 ALUNO(A): _____ DATA: ____/____/____

1) COMPLETE A SEQUÊNCIA NUMÉRICA:

100									109
110									119
120									129
130									139
140									149
150									159
160									169
170									179
180									189
190									199


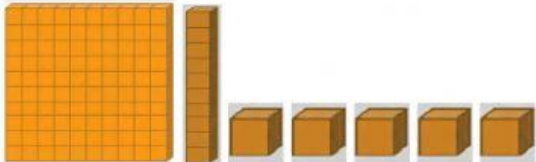


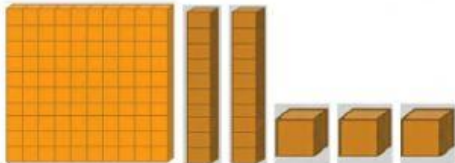

2) COMPLETE COM OS NÚMEROS VIZINHOS:

	125	
	163	
	178	
	107	
	139	
	184	

PRESTE ATENÇÃO:

 1 UNIDADE	 1 DEZENA	 1 CENTENA
--	---	--

3) CONTE AS PEÇAS DO MATERIAL DOURADO E ESCREVA OS NÚMEROS CORRESPONDENTES:

 <input type="text"/>	 <input type="text"/>
 <input type="text"/>	 <input type="text"/>
 <input type="text"/>	 <input type="text"/>

4) LIGUE OS NÚMEROS AOS SEUS NOMES.

126

CENTO E TRINTA E SETE

137

CENTO E CINQUENTA

190

CENTO E VINTE E SEIS

150

CENTO E NOVENTA