







Hitung dan tentukan bakinya.

1.	 <div><div>3</div> - <div>1</div> = <div></div></div>
2.	 <div><div>5</div> - <div>2</div> = <div></div></div>
3.	 <div><div>9</div> - <div>0</div> = <div></div></div>
4.	 <div><div>6</div> - <div>3</div> = <div></div></div>
5.	 <div><div>8</div> - <div>4</div> = <div></div></div>
6.	 <div><div>6</div> - <div>5</div> = <div></div></div>