



**Directions:** Read the questions carefully and choose the correct answer.

1. Which of the following shows 10 oranges?




2. How many giraffes are there?



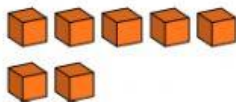
☐ 6 ☐ 3 ☐ 5

3. How many bats are there?

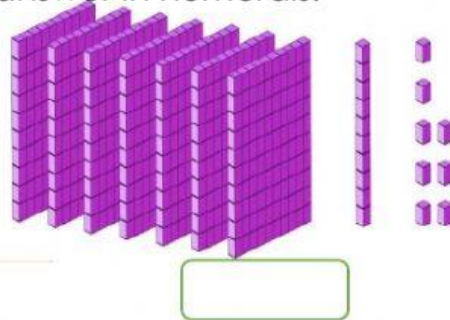


☐ 9 ☐ 4 ☐ 10


4. How many blocks are there?  
Write your answer in numerals.



5. How many blocks are there? Write your answer in numerals.



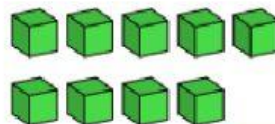
6. How many blocks are there? Write your answer in numerals.



7. Count the sweets. Write your answer in numerals.



8. How many blocks are there?  
Write your answer in numerals.



**B. Directions:** Find the missing number. Choose the correct answer.

1. What are the numbers that complete the skip count?  
810, 820, \_\_\_\_\_, 840, 850, \_\_\_\_\_, 870, 880, 890, 900
  - a. 810 and 860
  - b. 830 and 860
  - c. 830 and 880
  
2. What are the three numbers next to the skip counting pattern?  
300, 400, 500, \_\_\_\_\_, \_\_\_\_\_, \_\_\_\_\_
  - a. 600, 650, and 700
  - b. 600, 700, and 800
  - c. 510, 520, and 530
  
3. What are these numbers skip counting by?  
50, 60, 70, 80, 90, 100, 110, 120, 130, 140
  - a. 100s
  - b. 50s
  - c. 10s