
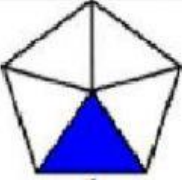
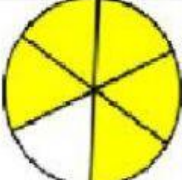



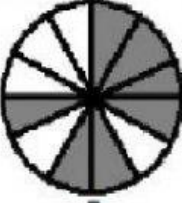


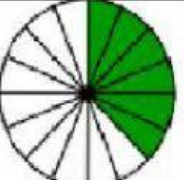
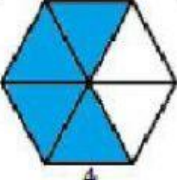
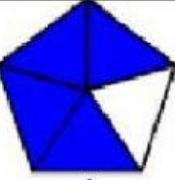
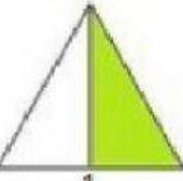
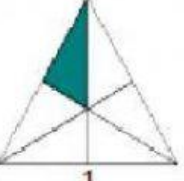

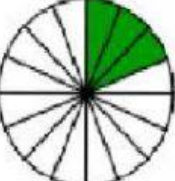


Mathematics Year 2

Compare fractions

Choose the fraction which is larger.

 $\frac{1}{10}$	 $\frac{1}{5}$	 $\frac{5}{6}$	 $\frac{5}{8}$
 $\frac{3}{8}$	 $\frac{3}{6}$	 $\frac{7}{12}$	 $\frac{7}{8}$
 $\frac{6}{8}$	 $\frac{6}{16}$	 $\frac{4}{6}$	 $\frac{4}{5}$
 $\frac{1}{2}$	 $\frac{1}{6}$	 $\frac{3}{5}$	 $\frac{3}{16}$