

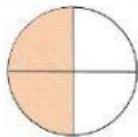
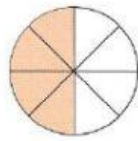
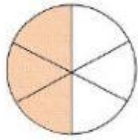
UNIDAD EDUCATIVA PARTICULAR BILINGÜE

LEADER KIDS

ENGLISH EXAM

5TH GRADE TEACHER MARIA JOSE TAFFUR

1. Match the fraction with the correct graphic. (2Points)



$$= \frac{2}{4} =$$

$$= \frac{3}{6} =$$

$$= \frac{4}{8} =$$

2. Look at the fractions and choose the correct words.

$$\frac{1}{2} = \frac{2}{4} = \frac{3}{6} = \frac{4}{8} :$$

3. Write the ordinal number next to the correct roman number.

1) XVII = _____


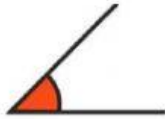
2) XX = _____

3) XIV = _____

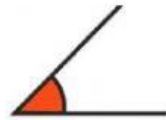
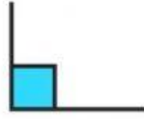
4) XXV = _____

4. Select the correct angles.

RIGHT ANGLE



STRAIGHT ANGLE



5. Drag and drop the words with their correct meaning.

Less than 90°

Greater than 90°
and less than 180°

Exact 90°

Greater than 180°

REFLEX ANGLE

OBTUSE ANGLE

ACUTE ANGLE

RIGHT ANGLE