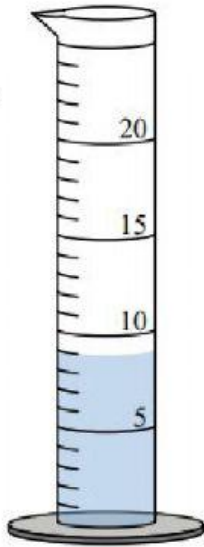


Name: \_\_\_\_\_

Date: \_\_\_\_\_

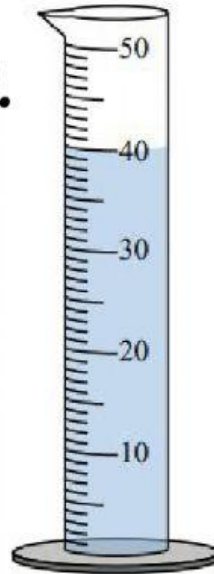
Determine how much liquid is in each graduated cylinder.

1.



\_\_\_\_\_ mL

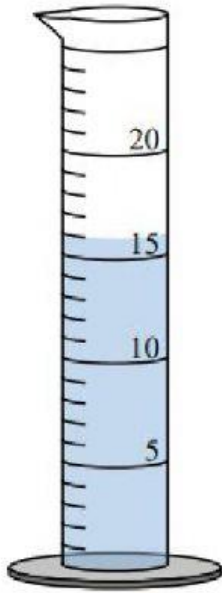
2.



\_\_\_\_\_ mL

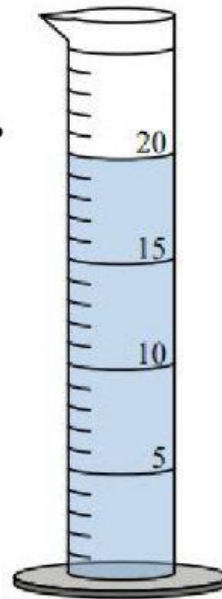
Determine how much liquid is in each graduated cylinder.

3.



\_\_\_\_\_ mL

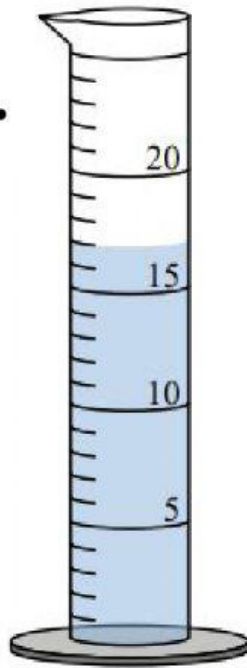
4.



\_\_\_\_\_ mL

Determine how much liquid is in each graduated cylinder.

5.



\_\_\_\_\_ mL