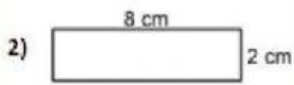

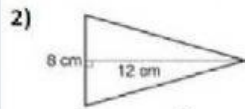
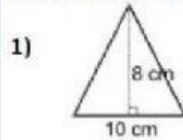


Fluency Challenge 1

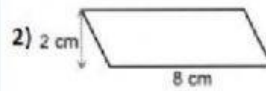
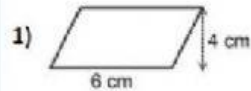
Calculate area of the rectangles



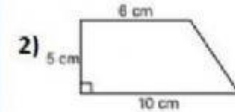
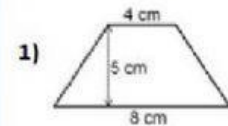
Calculate area of the triangles



Calculate the area of the parallelograms

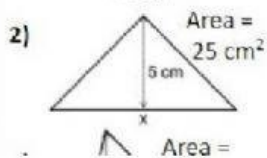
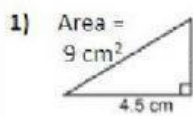


Calculate the area of the trapeziums

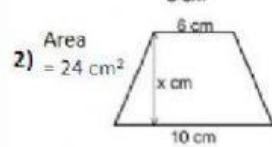
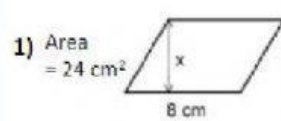


Fluency Challenge 2

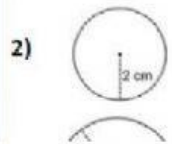
Calculate x



Calculate x



Calculate the area of the following circles.
Answers correct to 1 decimal place



Calculate the area of the following circles.
Leave your answers in terms of π .

