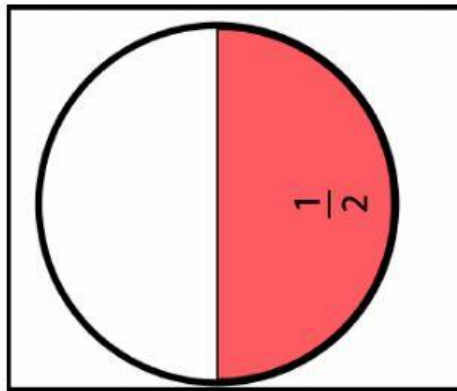
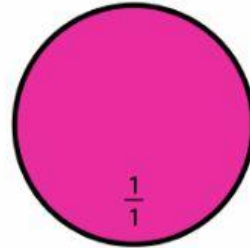


September 2021 Math Pre/Post-Assessment
Comparing Unit Fractions

Name _____

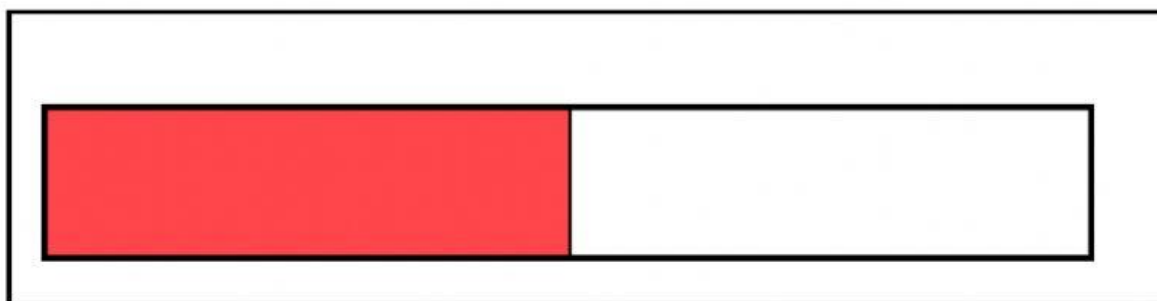

Date _____

1. Look at the circle. This is the whole unit.
Point to the picture that shows a half of this circle.




“ Point to on behalf of the circle”
“ Where is the picture that shows half of the circle?”

2. Look at the picture. It shows $\frac{1}{3}$ of a bar. Which fraction is bigger than $\frac{1}{3}$?



"One half is bigger than one third. Point to $\frac{1}{2}$ "
"Do you see a picture that shows one half of the bar?"


3. This is a whole pizza. It is split into 8 slices. Each slice is a fraction of the pizza.
What is a unit fraction of this pizza?



$$\frac{1}{8}$$

"Point to one slice of pizza"
"Do you see one/eights of a pizza?"

4. Look at the watermelon slices.
They are fractions of a whole unit.
What is the whole unit?



"Point to the whole watermelon."
"What unit these slices belong to?"