

Name: _____

Date: _____

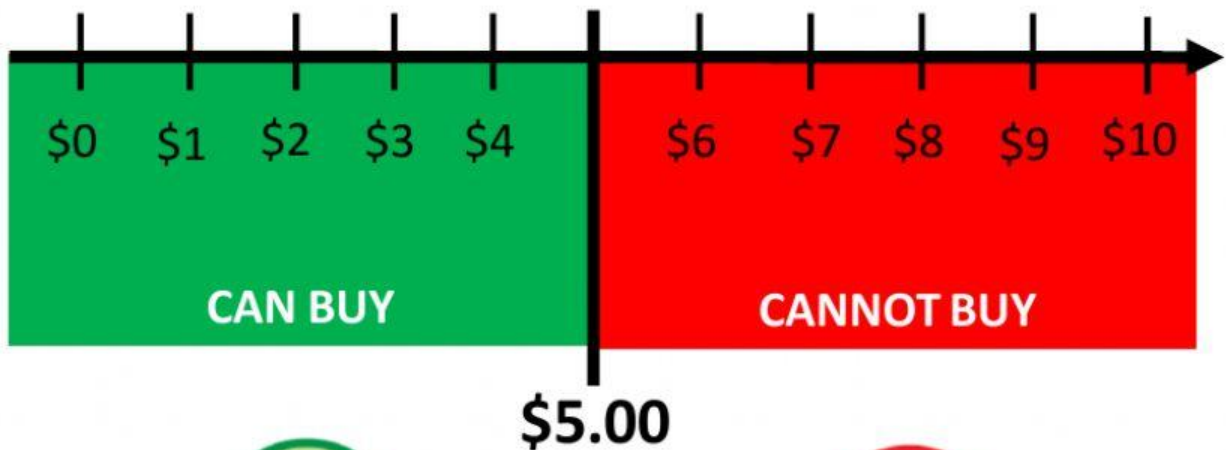
No.	Item	Price
1	Fish burger	\$3
2	Coke	\$2.50
3	Corn cup	\$2
Total price:		\$7.50

You have **\$5.**

Do you have enough money to buy your items?



Circle the correct answer.



YES



NO

Name: _____

Date: _____

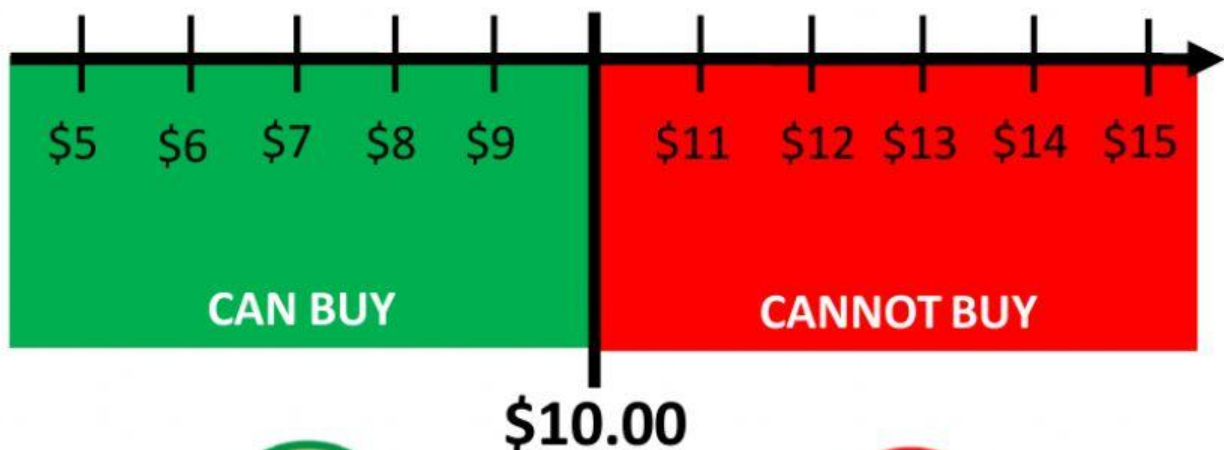
No.	Item	Price
1	Wrapping Paper	\$1
2	Scotch Tape	\$3.50
3	Pencil Case	\$3.50
Total price:		\$8

You have **\$10**.

Do you have enough money to buy your items?



Circle the correct answer.



YES



NO

Name: _____

Date: _____

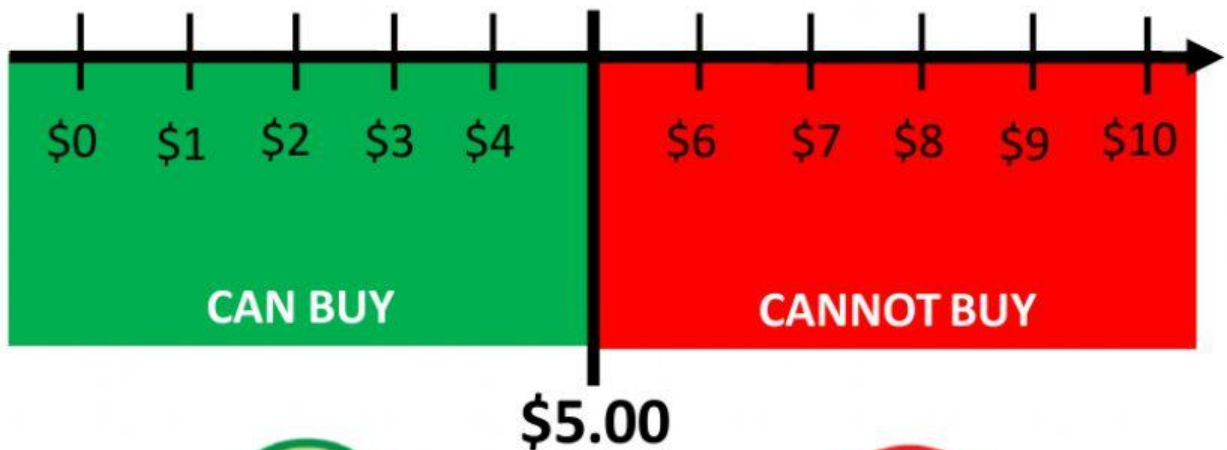
No.	Item	Price
1	Tuna Sandwich	\$2
2	Curry Puff	\$1.50
3	Coffee	\$1
Total price:		\$4.50

You have **\$5**.

Do you have enough money to buy your items?



Circle the correct answer.



YES



NO

Name: _____

Date: _____

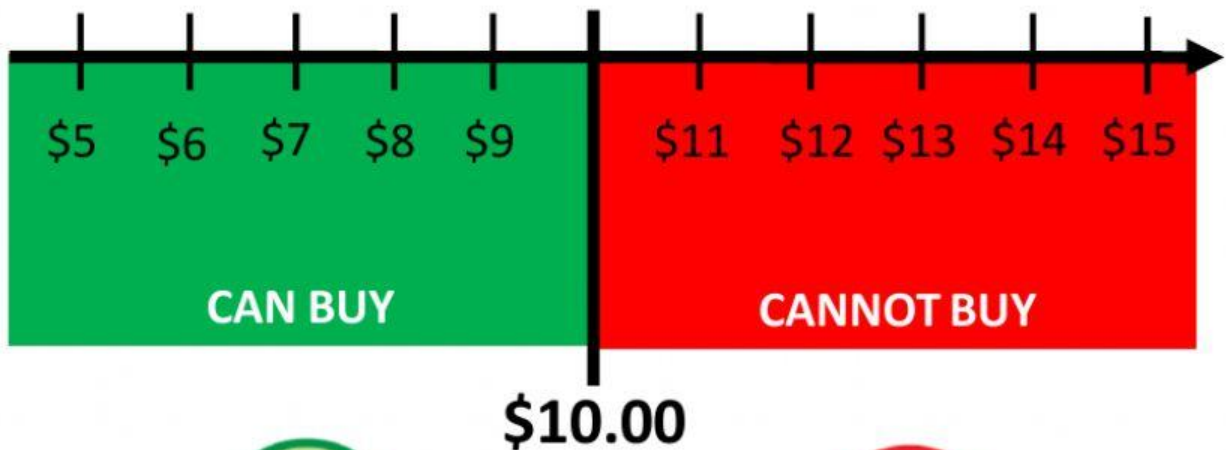
No.	Item	Price
1	Spaghetti	\$3
2	Pasta Sauce	\$4
3	Minced Chicken	\$3
4	Mushroom	\$2
Total price:		\$12

You have **\$10**.

Do you have enough money to buy your items?



Circle the correct answer.



YES



NO

Name: _____

Date: _____

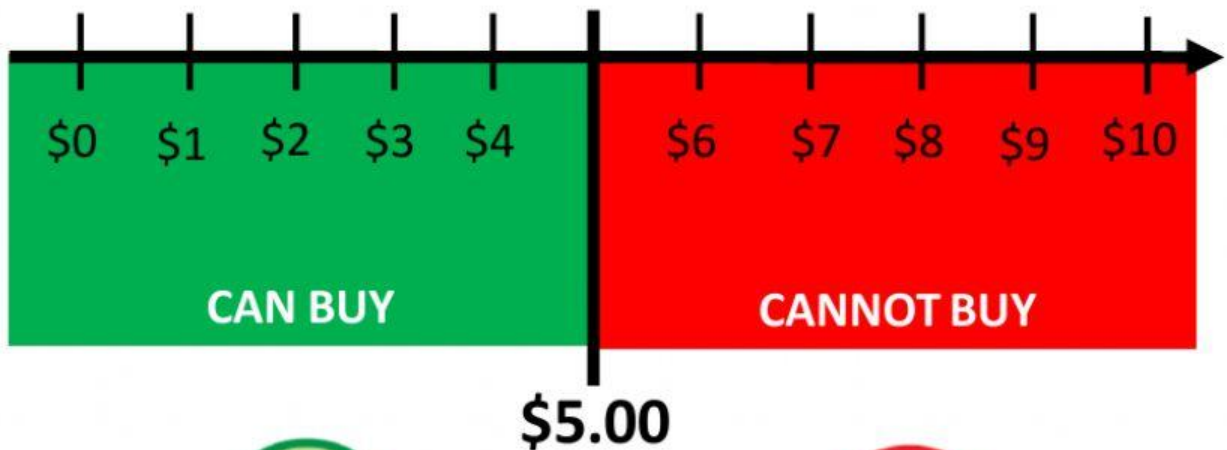
No.	Item	Price
1	Air Freshener	\$2.50
2	Toilet Paper	\$2.50
3	Shampoo	\$5
Total price:		\$10

You have **\$5**.

Do you have enough money to buy your items?



Circle the correct answer.



YES



NO

Name: _____

Date: _____

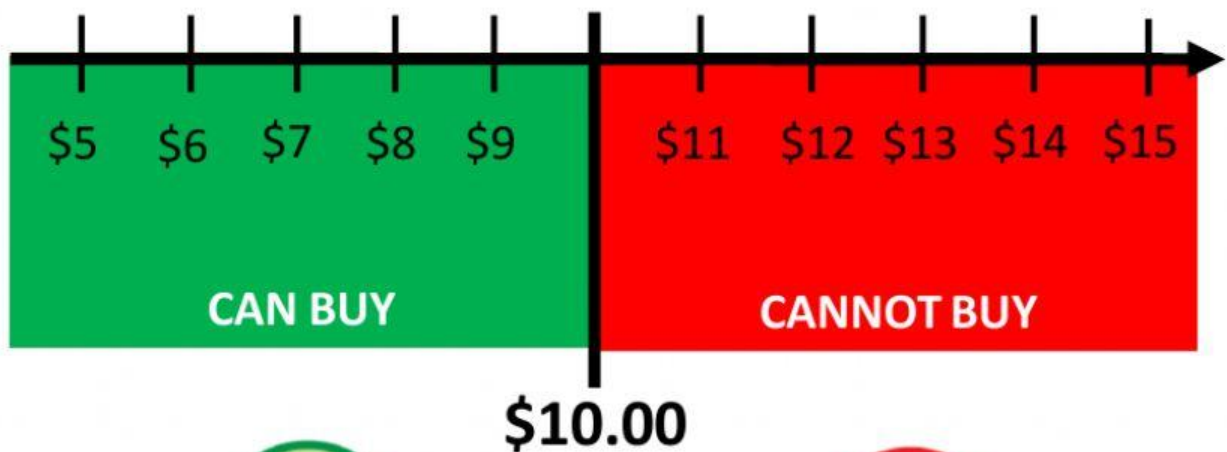
No.	Item	Price
1	Fishball noodles	\$3.50
2	Milkshake	\$2.50
3	Cheese fries	\$3.50
Total price:		\$9.50

You have **\$10.**

Do you have enough money to buy your items?



Circle the correct answer.



YES



NO