



NOME: _____

RESOLVA AS ADIÇÕES, ENCONTRE OS RESULTADOS E COLOQUE-OS NA CASINHA, DE ACORDO COM A ORDEM DE CADA NÚMERO: DEZENA E UNIDADE.


UTILIZE O MATERIAL DOURADO OU AS FICHAS SOBREPOSTAS PARA RESOLVER AS CONTAS.




$$10 + 5 =$$




$$10 + 8 =$$




$$2 + 0 =$$



$$32 + 4$$



$$20 + 7$$



$$27 + 4$$

