

Name _____

STD 1

Promotion Term Test 2021.

Mathematics Part 1

1. Match these numbers to the correct answer.

40	twenty
20	seventy-two
10	forty
59	fourty
72	ten
	fifty - nine

2. Write the numeral name to match the numeral.

80	_____
33	_____
12	_____

3. Write the numeral to match the number name.

sixty - one	_____
nineteen	_____

4. Select the **odd** number/numbers

46 52 66 31

5. Select the **even** number/numbers

33 62 85 97

6. Select the **5th** number in the list below.

12 29 34 41 53 67


7. Write the following numeral in **Expanded Notation**.

$$\begin{aligned} 36 &= (3 \times \underline{\quad}) + (\underline{\quad} \times \underline{\quad}) \\ &= \underline{\quad} + \underline{\quad} \\ &= \underline{\quad} \end{aligned}$$

8. Put these numbers from **smallest to biggest**



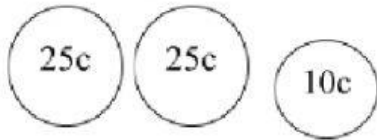
9. Put these numbers from **biggest to smallest**.



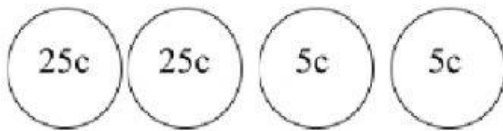
10. Complete the statement below.

34 = _____ tens and _____ ones

11. This is **Damari's money**.



This is **Zidane's money**



Select the box next to the **correct** statement.

_____ Damari has **more** money than Zidane.


















_____ Damari has **less** money than Zidane.

_____ Damari and Zidane have the **same amount** of money.

12. Select the **unit** used to **measure** the **length** of a **tablespoon**.

Centimetre litre metre

13. Joan has a tomato tree in her yard. The numbers of tomatoes shown are in the pictograph below. Use the information provided to answer the question.

Day	Picked Tomato
Day 1	     
Day 2	   
Day 3	   
Day 4	  

KEY  = 1 tomato

- a. How many tomatoes did the farmer pick on the first day? _____
- b. Which day did the farmer pick the most tomatoes? _____
- c. Which two days did the farmer pick the same amount of tomatoes? _____

- d. What's the difference between the number of tomatoes picked on Day 3 and Day 4? _____
- e. How many tomatoes in total did he pick for the season? _____

END OF TEST