

Name _____

Grade 1

Mathematics

Jamaican Notes and Coins

1. What is the value of the notes/coins shown below?



- A. \$ 150.00
- B. \$160.00
- C. \$170.00

2.



- A. \$ 150.00
- B. \$160.00
- C. \$170.00

3.



- A. \$ 150.00
- B. \$160.00
- C. \$170.00

4.







- A. \$30.00
- B. \$25.00
- C. \$35.00

5.



- A. \$20.00
- B. \$40.00
- C. \$30.00

PRICE LIST	
Milk \$ 70.00	lollipop \$20.00
	
	
Soda \$100.00	Donut \$45.00

- 6. How much does a soda cost?
- 7. What is the cost of a soda and a donut?
- 8. What is the cost of a donut and milk?
- 9. How much does a donut cost?
- 10. A soda and a lollipop cost?