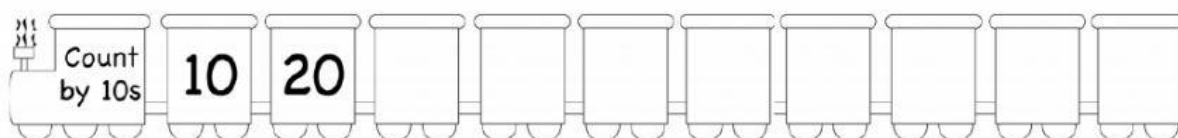
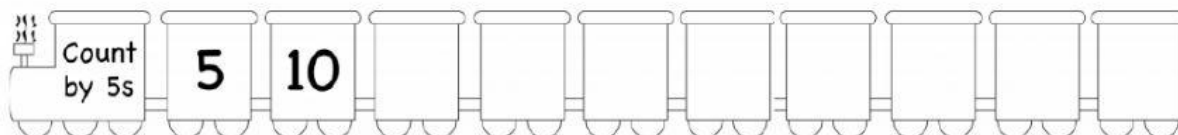
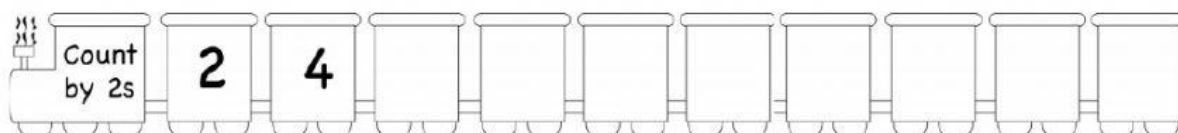


Friday 18th June, 2021

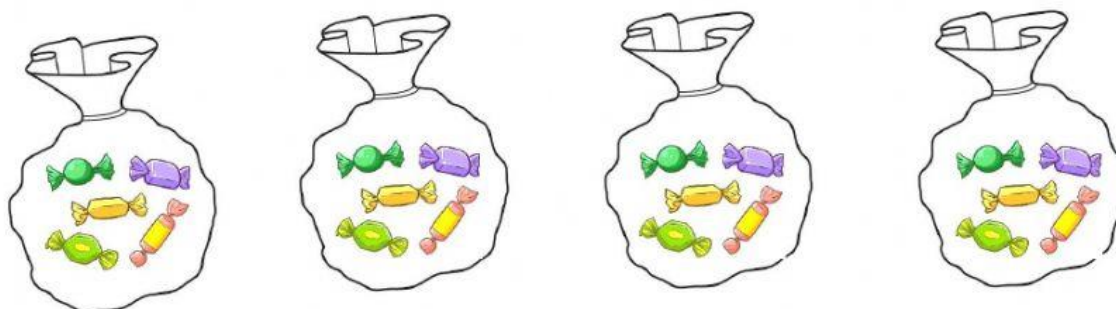
Term 3

Weekly Test 8- Mathematics

A. Fill in the missing numbers.



B. Complete the missing information.



There are _____ sweets in all.

There are _____ sets of 5 sweets.

_____ sets of _____ sweets equal 20.

C. Money word problems

Remember to write your number statements. Do not type the dollar signs for the number statements.

1. Mummy had \$20.

She bought a box of milk for \$18 at the grocery.

How much money she had left?

2. Ryan had \$20.

He purchased a story book for \$15 at the book store.

How much money he had left?

3. Zendaya had \$14.

Her sister gave her \$6 more.

How much money she had in all?

4. Jada has \$7.

Khertima has \$5.

Zachariah has \$8.

How much money they have altogether?
