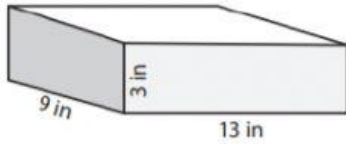
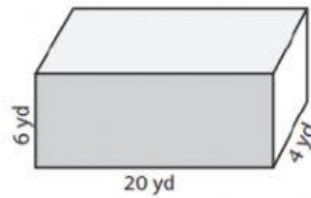


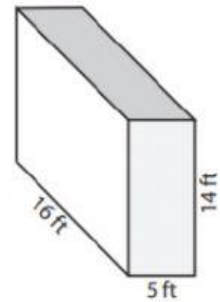
1) Find the Surface Area of each Rectangular Prisms:



Surface Area = _____



Surface Area = _____



Surface Area = _____

[illegible]