

## GRADE I – MATHEMATICS

### I. Choose and tick (✓) the correct answer.

(4 × 1 = 4)



1. I am the number name which comes if you count 5 numbers forward from sixty-five. Who am I?  
A) sixty                      B) seventy                      C) sixty-nine                      D) seventy-one
2. What number comes between 47 and 49?  
A) 47                      B) 46                      C) 49                      D) 48
3. Which number comes just after 43?  
A) 42                      B) 44                      C) 45                      D) 46
4. When we count forward from number 91, the number that comes next is \_\_\_\_\_.  
A) 89                      B) 90                      C) 92                      D) 93

### II. State whether the following statements are True or False.

(4 × 1 = 4)

5. One banana is measured in g. \_\_\_\_\_
6. The hour hand takes 1 hour to complete one round of the clock. \_\_\_\_\_
7. The height of tall buildings can be measured using a handspan. \_\_\_\_\_



8. A  can hold more water than a  . \_\_\_\_\_

### III. Match the following.

(1 × 4 = 4)

9. **Column A**

- A1) January
- A2) Year
- A3) February
- A4) December


**Column B**

- B1) Last month
- B2) Shortest month
- B3) 12 months
- B4) First month

**IV. Solve as instructed.**

**(4 × 1 = 4)**

10. Write H for the heavier object and L for the lighter object.



11. Tick (✓) the container that has more capacity and cross out (X) the one that has less capacity.



12. Write the most suitable unit for measuring weight of
- a. a chair \_\_\_\_\_
- b. an orange \_\_\_\_\_
13. What is the standard unit to measure capacity or volume of
- a. Cough syrup? \_\_\_\_\_
- b. Water tank? \_\_\_\_\_

**V. Do as directed.**

**( $2 \times 2 = 4$ )**

14. Complete the following tables.

a.  $6 \times 6 =$  \_\_\_\_\_

b.  $5 \times 5 =$  \_\_\_\_\_

15. Complete the following tables.

a.  $2 \times 7 =$  \_\_\_\_\_

b.  $2 \times 9 =$  \_\_\_\_\_