



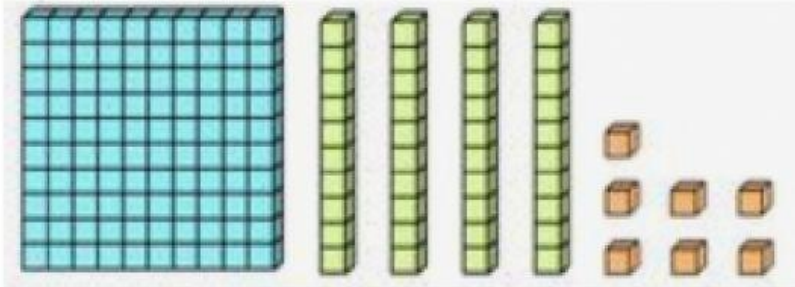
DL DAV Model School

ND Block , Pitampura, Delhi- 34



Maths Worksheet

Q1. Write the number for the given diagram.



Number _____

Q2. What is the value of 6 in the given number.

a) 362

b) 476

6 is _____

6 is _____

Q3. Read the following number and write the digits.

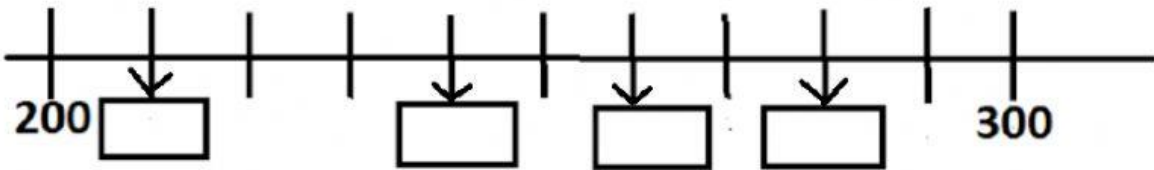
Three hundred and thirty - _____

Q4. Drag the given number into a list of odd and even numbers.

205 124 417 320

Odd Numbers	Even Numbers

Q5. Write the number at each arrow in the given number line.

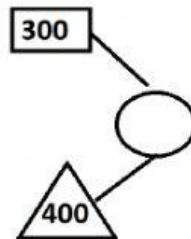


Q6. Change the order to make each calculation easier.

$$6 + 19 + 4$$

$$\underline{\quad} + \underline{\quad} + \underline{\quad} = \underline{\quad}$$

Q7. The number in square and the triangle add up to the number in the circle. Fill in the missing number.



Q8. Complete the given addition by David's Method.

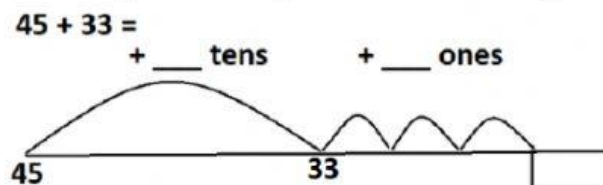
$$65 + 24$$

$$60 + 20 = \underline{\quad}$$

$$5 + 4 = \underline{\quad}$$

$$80 + 9 = \underline{\quad}$$

Q9. Complete the given addition by Zara's Method.



Q10. Given bar totals 100. Writing the missing number.

