










Inquiry question : What is the effect of the magnet on each object?

According to your **observation**, use  or  for each object and mention whether it is metal or non-metal.



Object	Magnetic	Metal(shiny)/Non Metal(not shiny)
		
 Steel paperclip		
 Cobalt tools		
 Nickel nails		

 Iron hammer		
 Nickle/steel coin		
 Aluminium foil		
 Copper wire		

Conclusion:

Complete the following sentence:

Materials can be divided to _____ materials which are attracted to _____ and _____ materials which are not attracted to magnets.