







NOME: _____



DATA: ____/____/____



ESCREVA A QUANTIDADE DE BOLINHAS DE CADA DADO
E RESOLVA AS CONTINHAS.



 
 + =



 
 + =



 
 + =

 
 + =

 
 + =

 
 + =

 
 + =

 
 + =

ORDENE OS NUMERAIS ABAIXO, SEGUINDO A SEQUÊNCIA NUMÉRICA.

<input type="text"/>	<input type="text"/>	<input type="text"/>	<input type="text"/>	<input type="text"/>
<input type="text"/>	<input type="text"/>	<input type="text"/>	<input type="text"/>	<input type="text"/>

