


Mathematics

Number 20

Counting by 2's

Drag and drop the numbers in correct order.

| | | | | |
|----|----|----|----|----|
| 8 | 14 | 10 | 2 | 18 |
| 16 | 20 | 6 | 12 | 4 |

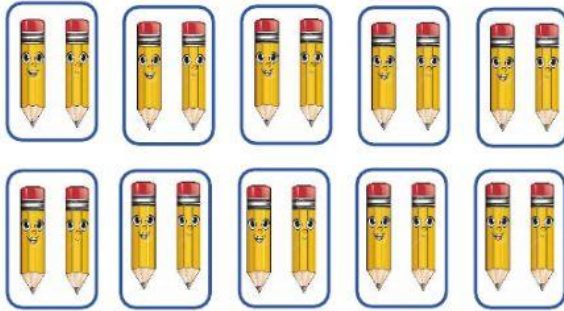


| | | | | |
|--|--|--|--|--|
| | | | | |
|--|--|--|--|--|



| | | | | |
|--|--|--|--|--|
| | | | | |
|--|--|--|--|--|

Number 20 (Grouping)

Sets of **2 pencils.**


There are _____ sets of 2 pencils in a set of 20 pencils.

_____ sets of 2 equals 20.

Sets of **4 cars.**

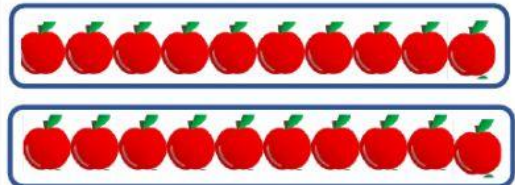
There are _____ sets of 4 cars in a set of 20 cars.

_____ sets of 4 equals 20.

Sets of **5 flowers.**

There are _____ sets of 5 flowers in a set of 20 flowers.

_____ sets of 5 equals 20.

Sets of **10 apples.**

There are _____ sets of 10 apples in a set of 20 apples.


_____ sets of 10 equals 20.

Number 20
Money word problems

Four friends went to Zariah's restaurant to buy food.

Answer the following questions. **Remember to write your number statements.**

Do not type the dollar signs for the number statements.

| One slice of Pizza | Burger | Snack | Hotdog | Drink | Lollipop |
|---|---|---|---|---|---|
|  |  |  |  |  |  |
| \$10 | \$12 | \$4 | \$8 | \$6 | \$2 |

1. Rashad bought a **burger** and **hotdog**.
What was his **total** bill?

2. Kasey-Ann bought a **slice of pizza**, **snack** and **drink**.
What was her **total** bill?

3. Travis bought 2 slices of pizza.
What was his **total** bill?

4. Jermiyah bought a **slice of pizza**, **hotdog** and **lollipop**.
What was her **total** bill?
