

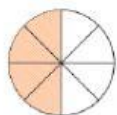
Types of Fractions

Identify the fractions as Proper, Improper or Mixed.

$\frac{4}{7}$	
$2\frac{3}{7}$	
$\frac{6}{11}$	
$\frac{9}{4}$	
$3\frac{1}{5}$	

Write the fraction and match with its type.

$$\frac{\boxed{}}{\boxed{8}}$$



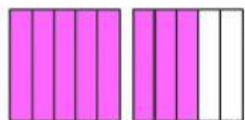
Unit Fraction

$$\frac{\boxed{1}}{\boxed{}}$$




Improper Fraction

$$\frac{\boxed{}}{\boxed{5}}$$



Mixed Number

$$\frac{\boxed{} \boxed{}}{\boxed{4}}$$



Proper Fraction