

La Puerta Government Primary School
Promotion test
Standard 2

Multiple choice (10 marks)

1. Who celebrates Easter?
 - a. Christians
 - b. Muslims
 - c. Hindus

2. Easter celebrates
 - a. The birth of Jesus Christ
 - b. Easter eggs and bunnies
 - c. The death and resurrection of Jesus Christ

3. Indian Arrival Day is celebrated on
 - a. May 30th
 - b. April 30th
 - c. May 24th

4. The East Indians came as _____.
 - a. Slaves
 - b. Farmers
 - c. Indentured labourers

5. The East Indians arrived on a ship called

- a. The Indian Ship
- b. T&T Spirit
- c. Fatel Razack

6. Eid Ul Fitr is a _____ holiday.

- a. Festive
- b. Public
- c. Religious

7. Who celebrates Eid?

- a. Christians
- b. Hindus
- c. Muslims

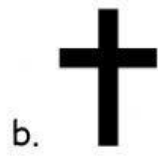
8. Eid marks the end of _____.

- a. Ramadan
- b. Lent
- c. Christmas

9. Muslims pray in a _____.

- a. Temple
- b. Mosque
- c. Church






10. Which religious sign belongs to the Islamic faith?



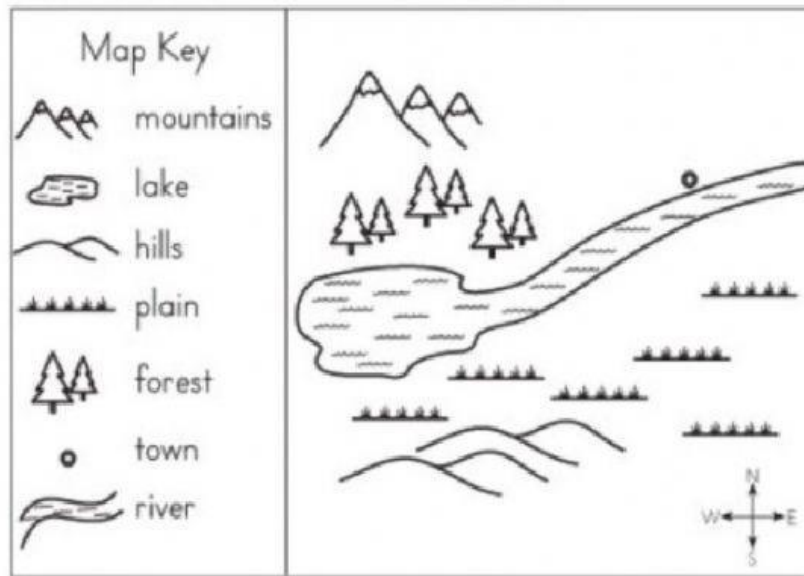
Section 2- Landforms (5 marks)

11. Fill in the names of the landforms from the word bank below.

Peninsula mountain range river swamp plain

| Landform | Name |
|--|-------|
| a.  | _____ |
| b.  | _____ |
| c.  | _____ |
| d.  | _____ |
| e.  | _____ |

Section 3 - Map Skills (2 marks)



12. Which direction is the mountain **from the hill**? _____
13. Where is the forest **from the town**? _____

Section 4 - Pollution (4 marks)

Match the pictures with the type of pollution. Use the words in the word bank.

Air pollution

land pollution

noise pollution

water pollution



14. _____



15. _____



16. _____



17. _____

Section 5 - Land use (4 marks)

Use the words to fill in the blanks.

Recreational

commercial

agricultural

residential

18. _____ land is used to build homes.

19. _____ land is used for growing and harvesting crops and livestock.

20. We can find businesses , restaurants and malls on _____ land.

21. We can find pools, parks and playgrounds on _____ land.

