






1. Choose the correct names for these tools

				
thermometer measuring cup scale hand lens tape measure	thermometer measuring cup scale hand lens tape measure	thermometer measuring cup scale hand lens tape measure	thermometer measuring cup scale hand lens tape measure	thermometer measuring cup scale hand lens tape measure

2. Complete the sentences.

- A _____ helps you observe more details than with your own eyes.
- We use a _____ to measure temperature.
- We use a _____ to measure amounts of liquids.
- We use a tool called a _____ to measure weight.
- We use a _____ to measure length, width and height.

3. Name the parameters of the rectangular prism

