



Name: _____


Class: _____

English for Math 1

Comparing Integers




Choose the correct symbol that makes the math statements true.





0

-12





-83

45




10

-10





-57

-69





+38

-76



-11

0



-29

-92

