

Name: _____

Mathematics Test 3.

Write the word name for each number:

1. 12 - _____

2. 18 - _____

3. What number comes **before** 16 - _____

4. How many **more** crayons are needed to make 18? _____



Write the missing numbers.

5. 20 19 17

6. 2 4 6

7. How many 5 dollars are there in 10 dollars? _____

8. What shape has 3 sides? circle triangle

9. Richard had 11 cars. Ziyaad had 7 cars

more than Richard. How many cars does

Ziyaad have?

10. Suveer had 12 toys. Vinaya had 8 toys. How many

toys do they have together?

How much money do I have?

11.



=

cents

12.



=












dollars

13. I have 6 square faces. I can stack. I am a

14. I have 1 curved face and can roll. I am a

15. Which is heavier? book table

FRUITS WE LIKE

			
			
			
			
apple	banana	pear	mango

16. The **title** of the pictograph is _____

17. _____ children like mangoes.

18. 4 children like _____

19. _____ is liked the **least**.

20. **more children** like banana than pear.