


VAMOS ARRASTAR OS NÚMEROS?


NÚMEROS VIZINHOS



16



13



19




10



17



14



14

15

18

20


17

11

NÚMEROS VIZINHOS




16



18



15



17

18



20




12



14



11



13

13

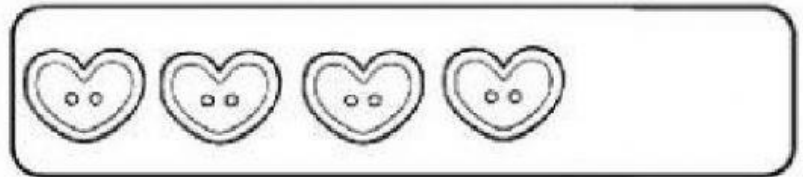
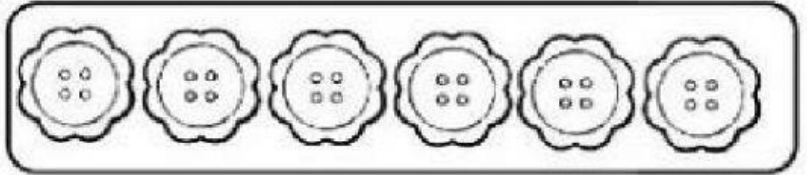
16

12

17

19

1) MARIA IRÁ COLOCAR EM SEU POTE 6 BOTÕES EM FORMA DE FLOR E 5 EM FORMA DE CORAÇÃO. QUANTOS BOTÕES ELA COLOCARÁ NO POTE?



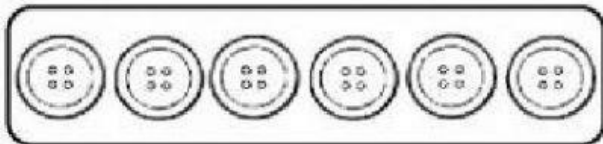
OPERAÇÃO

RESPOSTA

$$\square + \square = \square$$

\square BOTÕES.

2) FELIPE COLOCARÁ EM SEU POTE 6 BOTÕES REDONDOS E 5 QUADRADOS. QUANTOS BOTÕES ELE COLOCARÁ NO POTE?




OPERAÇÃO

RESPOSTA

$$\square + \square = \square$$

\square BOTÕES.


3) ONTEM FERNANDA TOMOU 3 XÍCARAS DE CHÁ E CARLOS TOMOU 4 XÍCARAS DE CHÁ. QUANTAS XÍCARAS ELES TOMARAM JUNTOS?



$$\square + \square = \square$$

RESPOSTA: ELES TOMARAM _____ XÍCARAS DE CHÁ.

4) FERNANDA E CARLOS COMERAM 4 BOLINHOS CADA UM. QUANTOS BOLINHOS COMERAM JUNTOS?



$$\square + \square = \square$$

RESPOSTA: ELES COMERAM _____ BOLINHOS JUNTOS