

NAME:.....

CLASS:.....

TELLING TIMES REVISION

1. Read each of these clock faces and write the digital time:




.....
:



.....
:



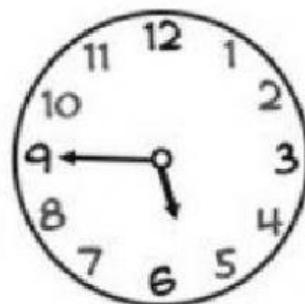
.....
:



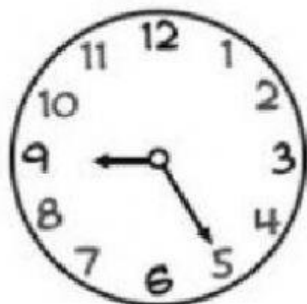
.....
:



.....
:




.....
:



.....
:




.....
:




.....
:

2. Read and match:



It's ten to three



It's half past eight



It's twenty-five
past nine




It's quarter past two



It's three twenty



It's ten past five



It's quarter to five

It's six forty



3. Choose the time that people usually do each of these things on a day:

A.M.





Morning

(Between midnight and noon)

P.M.

Afternoon & Evening

(Between noon and midnight)

a. Eat lunch		11 : 45 A.M	11 : 45 P.M
b. Play at the park		3 : 30 A.M	3 : 30 P.M
c. Wake up		7 : 00 A.M	7 : 00 P.M
d. Go to bed		9 : 15 A.M	9 : 15 P.M

4. Answer the questions:

a. How many seconds are there in a minute?

seconds

b. How many minutes are there in an hour?

minutes

c. How many minutes have passed?



minutes



minutes