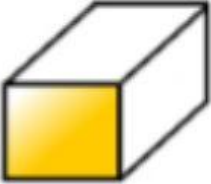


# 3D Shapes Worksheet 3


1) 

Name \_\_\_\_\_

Vertices \_\_\_\_\_

Faces \_\_\_\_\_

Edges \_\_\_\_\_


2) 

Name \_\_\_\_\_

Vertices \_\_\_\_\_

Faces \_\_\_\_\_

Edges \_\_\_\_\_

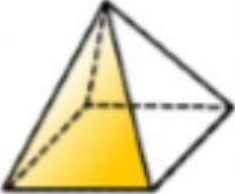
3) 

Name \_\_\_\_\_

Vertices \_\_\_\_\_

Faces \_\_\_\_\_

Edges \_\_\_\_\_


4) 

Name \_\_\_\_\_

Vertices \_\_\_\_\_

Faces \_\_\_\_\_

Edges \_\_\_\_\_


5) 

Name \_\_\_\_\_

Vertices \_\_\_\_\_

Faces \_\_\_\_\_

Edges \_\_\_\_\_


6) 

Name \_\_\_\_\_

Vertices \_\_\_\_\_

Faces \_\_\_\_\_

Edges \_\_\_\_\_

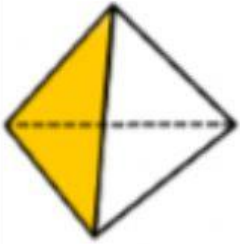
7) 

Name \_\_\_\_\_

Vertices \_\_\_\_\_

Faces \_\_\_\_\_

Edges \_\_\_\_\_


8) 

Name \_\_\_\_\_

Vertices \_\_\_\_\_

Faces \_\_\_\_\_

Edges \_\_\_\_\_

9) 

Name \_\_\_\_\_

Vertices \_\_\_\_\_

Faces \_\_\_\_\_

Edges \_\_\_\_\_

## Extension

Shapes A and B are types of prisms and shape C is a type of pyramid. Work out what shapes they are.


A) 

Name \_\_\_\_\_

Vertices 12

Faces 8

Edges 18


B) 

Name \_\_\_\_\_

Vertices 16

Faces 10

Edges 24

C) 

Name \_\_\_\_\_

Vertices 6

Faces 6

Edges 10