



\_\_\_\_\_  
Name: \_\_\_\_\_  
\_\_\_\_\_

\_\_\_\_\_  
Class: \_\_\_\_\_  
\_\_\_\_\_

## Types of Magnets

**Instructions:** Fill in the names of the magnets based on the pictures.

Bar magnet

Rod magnet

Horseshoe magnet


U-shaped magnet

Button magnet

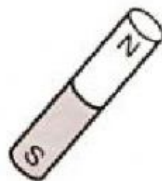
Ring magnet



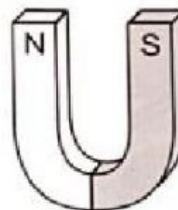
1. \_\_\_\_\_



2. \_\_\_\_\_




3. \_\_\_\_\_



4. \_\_\_\_\_



5. \_\_\_\_\_



6. \_\_\_\_\_