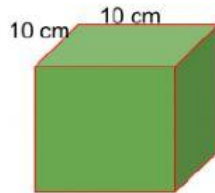


Name _____

Date _____

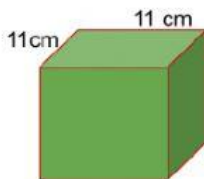
Surface Area of A Cube Ex. 3

Calculate the surface area of each cube



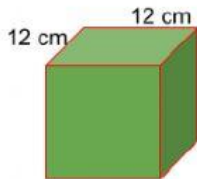
Area of 1 face = _____ cm x _____ cm = _____ square cm

Total surface area = _____ cm² x _____ = _____ cm²



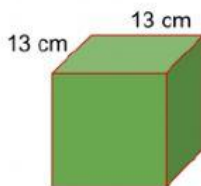
Area of 1 face = _____ cm x _____ cm = _____ square cm

Total surface area = _____ cm² x _____ = _____ cm²



Area of 1 face = _____ cm x _____ cm = _____ square cm

Total surface area = _____ cm² x _____ = _____ cm²



Area of 1 face = _____ cm x _____ cm = _____ square cm

Total surface area = _____ cm² x _____ = _____ cm²