



Họ và tên: _____











Lớp: _____ Ngày: ____ / ____ / ____

Phiếu số 1- Practice Addition/ Subtraction within 100 no regrouping

1. Cut the hat then glue.




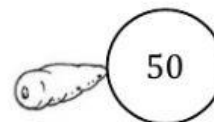
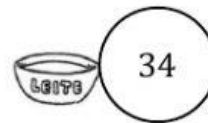
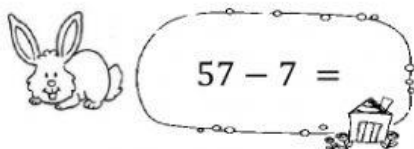
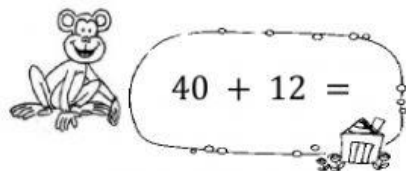
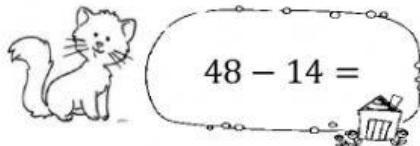
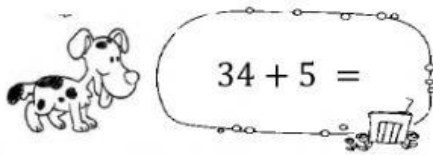
$\begin{array}{r} 54 \\ + 41 \\ \hline \end{array}$	$\begin{array}{r} 83 \\ - 10 \\ \hline \end{array}$	$\begin{array}{r} 26 \\ + 62 \\ \hline \end{array}$	$\begin{array}{r} 94 \\ - 64 \\ \hline \end{array}$	$\begin{array}{r} 75 \\ + 24 \\ \hline \end{array}$
$\begin{array}{r} 37 \\ - 11 \\ \hline \end{array}$	$\begin{array}{r} 44 \\ + 23 \\ \hline \end{array}$	$\begin{array}{r} 64 \\ - 32 \\ \hline \end{array}$	$\begin{array}{r} 33 \\ + 51 \\ \hline \end{array}$	$\begin{array}{r} 86 \\ - 25 \\ \hline \end{array}$





2. Match.



3. Choose the correct answer.

Rosa has 45 balloons.

She has 23 more balloons.

How many balloons does she have in all?

☐ 22

☐ 86

☐ 68



	Tens	Ones
<input type="checkbox"/>		

4. Choose the missing numbers.

