

Reading graphs











Fruits we like



stands for one girl.



stands for one boy.

	mango	
	banana	
	pineapple	
	pear	
	orange	

I How many children like:

a mango? ____ pineapple? ____ banana? ____
orange? ____ pear? ____

b The most popular fruit is ____.

c The least popular fruit is ____.

d Which fruit do you like best? ____

e Which fruit is liked by as many girls as boys?
