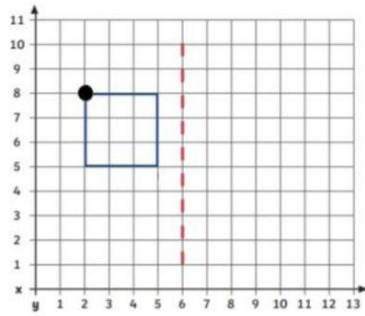


## Coordinates: Reflecting Shapes in the First Quadrant

Reflect the shape over the mirror line.

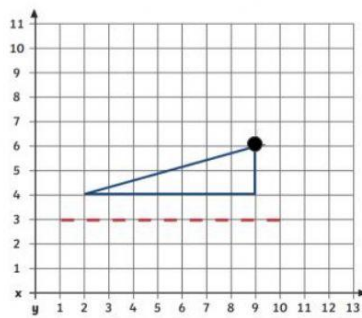
**Write the new coordinates in clockwise order starting from the corner with the dot.**



Write the coordinates for the reflected shape.

Start at the dotted coordinate and then give the rest in clockwise order.

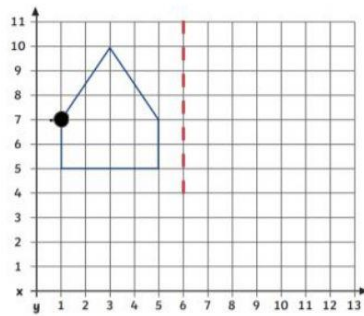
( , ) ( , ) ( , ) ( , )



Write the coordinates for the reflected shape.

Start at the dotted coordinate and then give the rest in clockwise order.

( , ) ( , ) ( , )



Write the coordinates for the reflected shape.

Start at the dotted coordinate and then give the rest in clockwise order.

( , ) ( , ) ( , ) ( , ) ( , )