



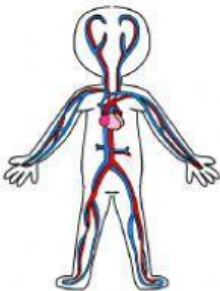
Circulatory and Respiratory Systems

Read the following statements. Decide if it is describing the

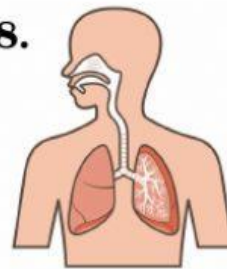
CIRCULATORY system or the **RESPIRATORY** system.

1. It's the system that carries oxygen and nutrients all over your body.
2. It's the systems that takes in oxygen into the body and takes out carbon dioxide.
3. It's made up of blood vessels, blood and heart.
4. It's made up of many organs including lungs, bronchi and alveoli.
5. We can find 3 types of cells: white, red and platelets.
6. The exchange of gases (oxygen and carbon dioxide) occurs here.

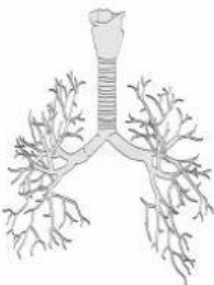
7.



8.



9.



10.

